

YEAR 5 NUMERACY – SET 5

Name Date

1

September						
Sun	Mon	Tue	Wed	Thu	Fri	Sat
			1	2	3	4
5	6	7	8	9	10	11
12	13	14	15	16	17	18
19	20	21	22	23	24	25
26	27	28	29	30		

Noah's birthday is on the 3rd of September.

Sarah's birthday is exactly 4 weeks later.

What is the date of Sarah's birthday?

24 September

30 September

1 October

3 October

2

10×2 has the same value as

$5 + 5 + 2.$

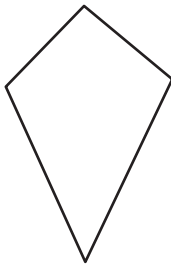
$5 \times 5 \times 2.$

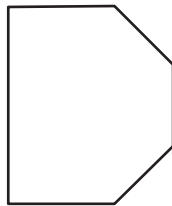
$5 \times 2 \times 2.$

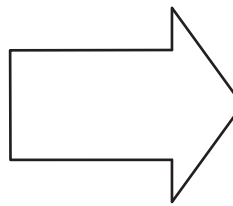
$5 \times 2 + 2.$

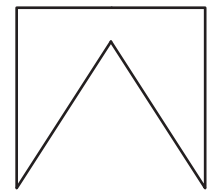
3

Which of these shapes is a pentagon?









4

A square has a perimeter of 28 metres.
What is the length of the side?

metres

YEAR 5 NUMERACY – SET 5

5

Name	Blue	Red	Green
Aaron	2	2	1
Ben	2	1	3
Jose	1	2	4
Larn	2	3	0

Points for ribbons

Blue - 3 points
Red - 2 points
Green - 1 point

This table shows the number of ribbons won by four boys on sports day.

Which boy scored the most points?

Aaron

Ben

Jose

Larn

6

It is 714 metres from Rick's house to the school.

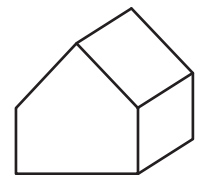
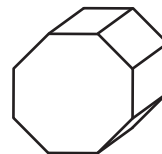
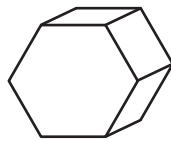
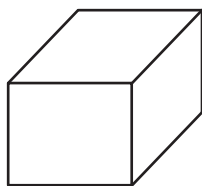
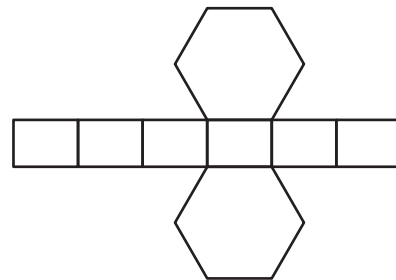
Glen lives 250 metres closer to the school than Rick.

How far is it from Glen's house to the school?

metres

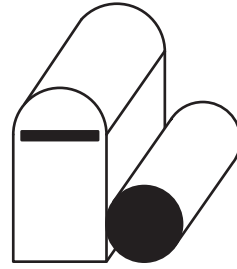
7

Which 3D shape can be made from this net?



YEAR 5 NUMERACY – SET 5

When this mail box is viewed from the **top** which one of these pictures shows what it would look like?



8

